




# MATHS SHARE - TERM 1 - DUE: WEDNESDAY 4TH MARCH

<p>MILD</p> 	<p>Using these cards, make some numbers that are both larger than 10 and smaller than 100.</p> <div style="display: flex; justify-content: space-around; align-items: center;"><div style="border: 1px solid black; padding: 10px; width: 40px; height: 40px; text-align: center; line-height: 40px;">3</div><div style="border: 1px solid black; padding: 10px; width: 40px; height: 40px; text-align: center; line-height: 40px;">7</div><div style="border: 1px solid black; padding: 10px; width: 40px; height: 40px; text-align: center; line-height: 40px;">5</div><div style="border: 1px solid black; padding: 10px; width: 40px; height: 40px; text-align: center; line-height: 40px;">7</div></div>
<p>HOT</p> 	<p>Place each of these digits onto one of the empty squares to make the sentence true. Find as many different ways of doing this as you can. Record your solutions.</p> <div style="display: flex; justify-content: space-around; align-items: center;"><div style="border: 1px solid black; padding: 10px; width: 40px; height: 40px; text-align: center; line-height: 40px;">3</div><div style="border: 1px solid black; padding: 10px; width: 40px; height: 40px; text-align: center; line-height: 40px;">7</div><div style="border: 1px solid black; padding: 10px; width: 40px; height: 40px; text-align: center; line-height: 40px;">5</div><div style="border: 1px solid black; padding: 10px; width: 40px; height: 40px; text-align: center; line-height: 40px;">7</div></div> <div style="display: flex; justify-content: center; align-items: center; margin-top: 20px;"><div style="border: 2px solid black; width: 40px; height: 40px; margin-right: 10px;"></div><div style="border: 2px solid black; width: 40px; height: 40px; margin-right: 10px;"></div><div style="font-size: 2em; margin-right: 10px;">&gt;</div><div style="border: 2px solid black; width: 40px; height: 40px; margin-right: 10px;"></div><div style="border: 2px solid black; width: 40px; height: 40px;"></div></div>
<p>SPICY</p> 	<p style="text-align: center;"><b>Ordering numbers riddle</b></p> <p>Ms Smith is 56 years old. Ms Chu is 49 years old. I know that Mr Taylor is older than Ms Chu. Ms Smith is older than Mr Taylor. How old might Mr Taylor be?</p> <p><i>How many different answers can you find?</i></p>

Choose one or more of the tasks to complete and submit your answers to the maths share post-box located at the office. Don't forget to include your name and class on your submission.

Goodluck! :)